

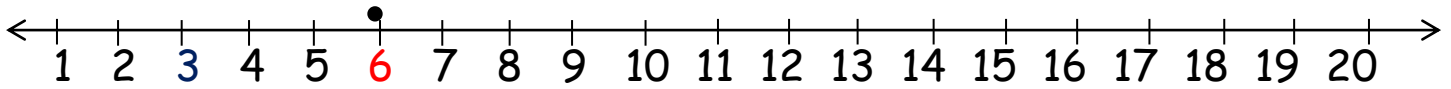
Name: _____

Date: _____

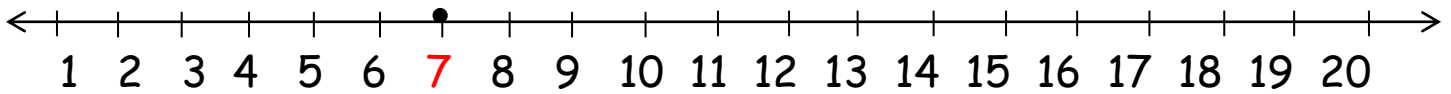
Addition Using a Number Line
(Up to 20)



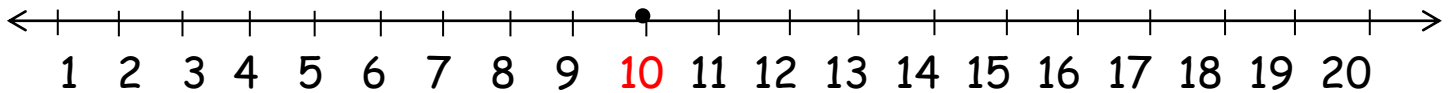
$6 + 5 = \underline{\quad}$



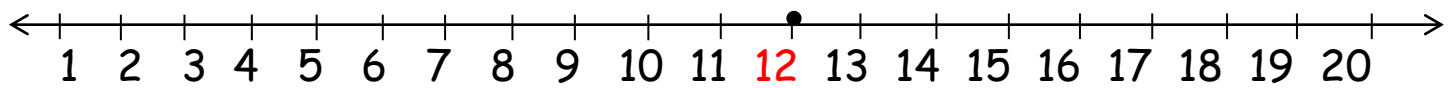
$7 + 6 = \underline{\quad}$



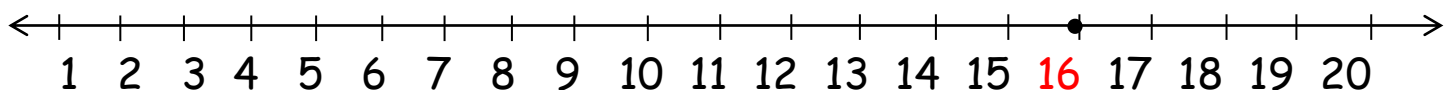
$10 + 2 = \underline{\quad}$



$12 + 3 = \underline{\quad}$



$16 + 4 = \underline{\quad}$



$15 + 5 = \underline{\quad}$

