

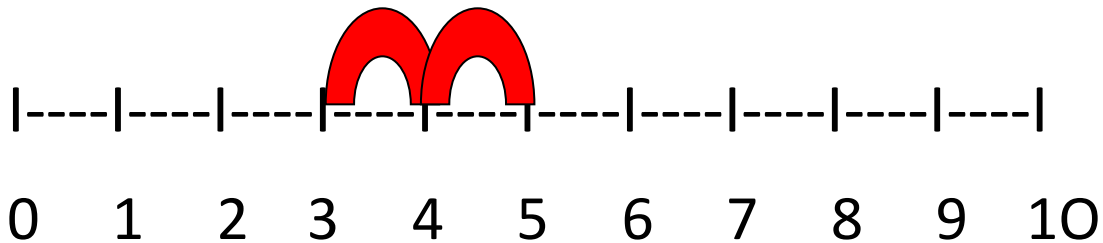
NAME:

DATE:

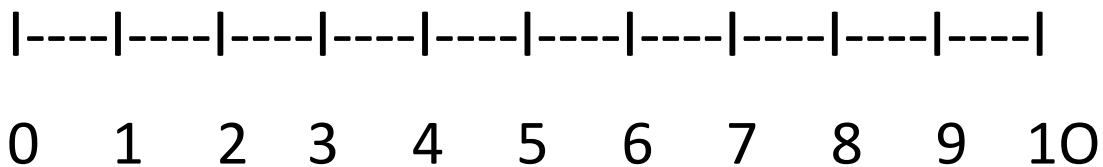
Addition with number lines.  
(up to 10)

*Complete the addition sums using the number lines provided. The first one has been done for you.*

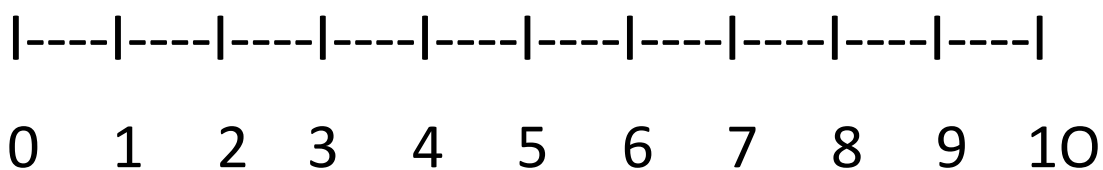
$$3 + 2 = 5$$



$$4 + 1 =$$



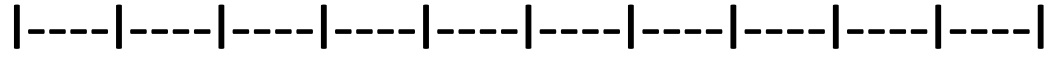
$$3 + 4 =$$



NAME:

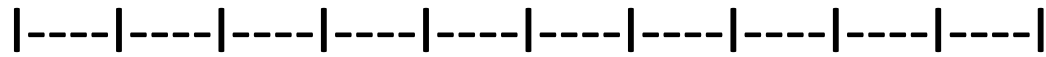
DATE:

$$6 + 2 =$$



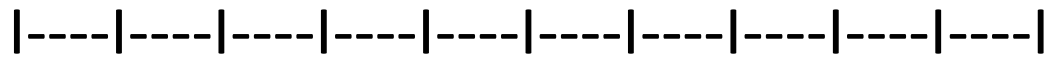
0 1 2 3 4 5 6 7 8 9 10

$$5 + 4 =$$



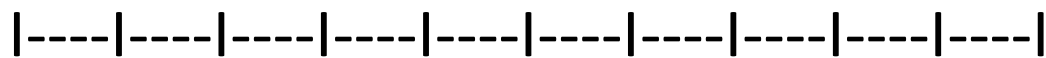
0 1 2 3 4 5 6 7 8 9 10

$$5 + 5 =$$



0 1 2 3 4 5 6 7 8 9 10

$$3 + 7 =$$



0 1 2 3 4 5 6 7 8 9 10

NAME:

DATE:

*If you have finished, why not create some of your own addition sums to complete?*

*Have fun! 😊*

|----|----|----|----|----|----|----|----|----|----|

0 1 2 3 4 5 6 7 8 9 10

|----|----|----|----|----|----|----|----|----|----|

0 1 2 3 4 5 6 7 8 9 10

|----|----|----|----|----|----|----|----|----|----|

0 1 2 3 4 5 6 7 8 9 10